



GRADE: II	SUBJECT: MATH	DATE: 10.03.2025	TIME: 2HRS	MARKS:40
NAME OF THE STUDENT:		ROLL NO:	NAME AND SIGN OF THE INVIGILATOR:	

SECTION A

QI. Fill in the blanks.

(6Q X 1M = 6M)

- The symbol used to represent division is \div .
- There are 60 minutes in an hour.
- Triangle has 3 sides and 3 corners.
- A bar graph uses bars to represent numbers.
- The short hand of the clock is called hour hand.
- When we divide a number by itself, the quotient is 1.

QII. Match the following.

(5Q X 1M = 5M)

‘A’		‘B’
a. 4:30	—	3
b. $18 \div 6 =$	—	366
c. leap year	—	Half past four
d. Division is	—	$\triangle \bigcirc$
e. $\triangle \bigcirc \triangle \bigcirc$	—	Repeated subtraction

QIII. Write true or false.

(6Q X 1M = 6M)

- Data is the information we collect which can be arranged in different ways to make it easier to understand. TRUE
- Objects that have a curved surface can be rolled. TRUE
- The number by which we divide is dividend. FALSE
- There are 7 days in a week. TRUE
- When we divide a number by 1, the quotient is the number itself. TRUE
- There are 320 days in a year. FALSE

SECTION B

QIV. Do as directed.

Q 1. Complete the following patterns

(3Q X 1M= 3M)

a. 5, 10, 15, 20, **25, 30, 35**

b. LM, NO, PQ, **RS TU VW**

c. 

Q 2. In a class, 40 students were asked to name their Favourite sports. 13 like badminton, 10 like basket ball, and 17 like tennis. Organise the data collected using Tally marks in the table given below.

(3Q X 1M= 3M)

Favourite sport	Number of students	Tally marks
Tennis	17	
Badminton	13	
Basketball	10	

Q 3. Solve the following using one step division method .

(2Q X 1M = 2M)

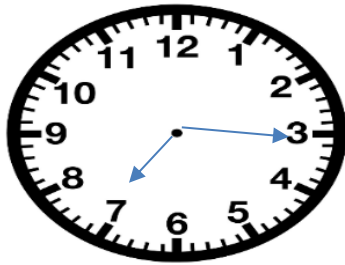
<p>a. $36 \div 6 = 6$</p> <p>Ans:</p> $ \begin{array}{r} 6 \\ 6 \overline{) 36} \\ \underline{- 36} \\ 00 \end{array} $	<p>b. $21 \div 7 = 3$</p> <p>Ans: 3</p> $ \begin{array}{r} 3 \\ 7 \overline{) 21} \\ \underline{- 21} \\ 00 \end{array} $
--	--

SECTION C

QV. Q.1 Draw the hands of the clock to show the given time.

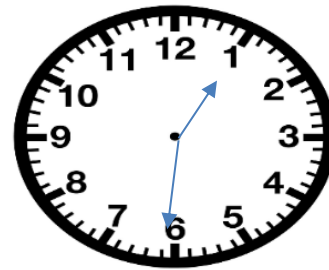
(2Q X 1M = 2M)

a.



7:15

b.



1:30

Q 2. Divide using repeated subtraction. (2Q X 1M = 2M)

a. $20 \div 4 = 5$

Ans:

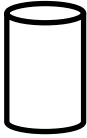

	20	
-	4	1
	16	
-	4	2
	12	
-	4	3
	08	
-	4	4
	4	5
	0	

b. $16 \div 8 = 2$

Ans:

	16	
-	8	1
	08	
-	8	2
	0	

Q 3. Mention flat face, curved face, vertex & edges of given shapes. (2Q X 1M = 2M)

Shapes	Flat face	Vertex	Curved face	Edges
 Cylinder	2	0	1	2
 Cuboid	6	8	0	12

Q 4. Read the pictograph given below and answer the question. (3Q X 1M = 3M)

Parry	★ ★ ★ ★ ★
Chandu	★ ★ ★ ★
John	★
Saad	★ ★

1 ★ = 5 stars

1. How many stars did parry earn?

Ans: **25**

2. How many stars did Saad earn?

Ans: **10**

3. Who earned the least number of stars ?

Ans: **John**

Q 5. Read the questions carefully and answer them. (2Q X 1M = 2M)

1. Which month comes before September?

Ans: **August**

2. Which day comes in between Wednesday and Friday? Ans: **Thursday**

SECTION D

QVI Q 1. Word problem

- a. A caterpillar collected 35 leaves to distribute among 7 of his children . How many leaves will each baby caterpillar get? (1Q X 2M = 2M)

Given :

No. of Collected leave = 35

No. of distributed among his children = 7

Ans:5 leaves will each baby caterpillar get.

Solve

$$\begin{array}{r} 5 \\ \hline 7 \overline{) 35} \\ \underline{-35} \\ 00 \end{array}$$

Q 2. Write the time shown in the clock.

(2Q X 1M = 2M)



1:00



2:45