



GRADE: III	SUBJECT: MATHS	DATE: 10.03.2025	TIME: 3HRS	MARKS: 60
---------------	-------------------	---------------------	---------------	--------------

SECTION A:

Q1. MULTIPLE CHOICE QUESTIONS

(10Q X 1M = 10M)

- In fraction $\frac{3}{5}$, ___ is out of 5 equal parts. (b)
a. 2 b. 3 c. 1 d. 4
- 1kg = ___ gram (a)
a. 1000 gram b. 10 gram c. 100 gram d. 20 gram
- Capacity is the amount of ___ that a container can hold. (b)
a. Apple b. liquid c. Biscuits. d. Chocolates
- Square has ___ sides
a. 2 b. 4 c. 3 d. 6
- The length of the train can be measured in ___ unit. (d)
a. Centimeter b. liter c. kilogram d. meter
- Area is the ___ occupied by something. (a)
a. Space b. length c. Width d. sum



(b)

In this given clock identify the time.

- a. 03:50 b. 03:00 c. 02:00 d. 02:45
- Distance between Mumbai to Nashik will be measured in ___ unit. (a)
a. Kilometer b. Centimeter. c. Gram d. liter
- 1 day = ___ hours
a. 48 hours b. 36 hours c. 24 hours d. 12 hours
- Choose the option that shows the symmetrical figure.



(c)

SECTION: B

QII. FILL IN THE BLANKS:

(5Q X 1M = 5M)

- 1 meter = 100 cm
- Perimeter is the Sum of all the sides.
- 1 hour = 60 minutes
- The Sun rises in the east direction.
- In fraction $\frac{4}{5}$, the numerator is 4.

QIII. MATCH THE FOLLOWING:

- 'A'
- 20 rupees (d)
 -  (e)
 - Tally marks (a)
 - 4 weeks (c)
 - length of pencil (b)
- 'B'
- Vertical line for every four counts
 - 5 cm
 - 28 days
 - ₹ 20
 - Plane shape

SECTION: C

QIV. SOLVE THE FOLLOWING

(5Q X 2M = 10M)

1. Write the shaded part of the following



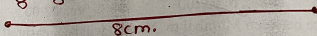
$\frac{5}{8}$

b)



$\frac{1}{3}$

2. Convert 2 hours into minutes. $1h = 60 \text{ min}$
 So $2h = 60 \times 2 = 120 \text{ min}$
3. Convert ₹ 22 into paise. $₹ 1 = 100p$
 So $₹ 22 = 22 \times 100p = 2200 \text{ paise}$
4. Arrange the fraction in ascending order.
 $\frac{3}{8}, \frac{5}{8}, \frac{4}{8}, \frac{1}{8}$ Ascending order $\rightarrow \frac{1}{8} < \frac{3}{8} < \frac{4}{8} < \frac{5}{8}$
5. Draw a straight line that measures 8 cm.




SECTION: D

QV. SIMPLIFY THE FOLLOWING

(6Q X 3 M = 18M)

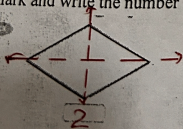
1. Convert 7 km 200 m into meter $1 \text{ km} = 1000 \text{ m}$ So $7 \text{ km} = 7 \times 1000 \text{ m}$
 $= 7000 \text{ m} + 200 \text{ m} = 7200 \text{ m}$
2. Find the perimeter of given figure in square grid



The perimeter of the figure is

16 Units

Mark and write the number of line of symmetry for each of the following



2



1



1

4. Add the following amount
₹ 116.90 + ₹ 145.80


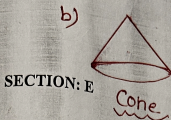
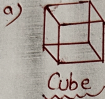
$$\begin{array}{r} \text{Add } \text{₹ } 116.90 \\ + \text{₹ } 145.80 \\ \hline \text{₹ } 262.70 \end{array}$$

Ans - ₹ 262.70

5. Write a.m. and p.m. for the following timings
- 08:10 in the evening p.m.
 - 04:20 in the morning a.m.
 - 12:10 after noon p.m.

6. Draw the following solid shapes.

- Cube
- Cone
- Cylinder



SECTION: E

QVI. WORD PROBLEMS

1. a) Shweta has 5 empty jugs. She fills each jug with 3 liters of juice. How many liters of juice is in the jug altogether? Solution - $3Q \times 4M = 12M$
No of empty jugs = 5
Each jug has juice = 3 litre
so total juice = $3 \times 5 = 15$ litre

- b) Add the given time 2 h 15 min + 5 h 30 min

2. a) Find out the Perimeter of given triangle.

Perimeter = sum of the three sides
 $P = 35m + 35m + 35m$
 $= 105m$




Add =

h	min
+ 2	15
5	30
7	45

 Ans = 7hr 45min

- b) Work out the area of given shape in square grid.



Ans - Area is 20 sq. unit

3. Read the bar graph and answer the following Question.

- Work out the number of students who like bananas. Banana
- Which fruit is liked by the most number of students? Mango
- Which fruit is liked the least by the students? Orange
- How many more students like mangoes than Oranges
 $50 - 20 = 30$ mangoes

