



Name - _____

Div - _____

Prepared by: Sonal Dixit

SUBJECT : Maths

L .No.13 Topic : Shapes & Patterns

Q1. Fill in the blanks.

1. Shapes are made of _____ and _____ lines.
2. _____ has 0 sides and 0 corners.
3. Flat shapes do not have _____. They are also called _____ shapes.
4. A _____ has 1 curved face, 0 edge and 0 vertex .
5. Objects that have _____ surface can be rolled.

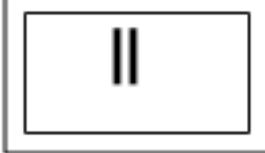
Q2. Write true or false.

1. Patterns exist in shapes, numbers, colours letters etc. _____
2. Square and rectangle have 4 sides and 4 corners. _____
3. Shapes do not made up of straight lines. _____
4. A triangle has 3 sides and 3 corners. _____

Q3. Complete the following patterns.

1.  _____, _____, _____
2. EF, GH, IJ, _____, _____, _____
3. 12, 15, 18, 21, _____, _____, _____
4. 80, 70, 60, _____, _____, _____

Q4. Mention names, number of sides and number of corners of given shapes.



Name - _____

Div - _____

Prepared by: Sonal Dixit

SUBJECT : Maths

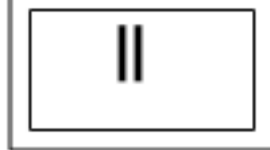
L .No.13 Topic : Shapes & Patterns

Shapes				
Name				
No. of sides				
No. of corners				

Q5. Draw the following shapes.

Cube	Cylinder	Sphere	Cone	Cuboid
------	----------	--------	------	--------

Q6. Circle the correct object.















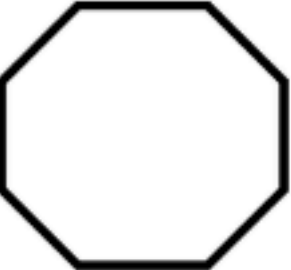



Name - _____

Div - _____

Prepared by: Sonal Dixit

SUBJECT : Maths

L .No.13 Topic : Shapes & Patterns

Subject Tr's. Sign HOD's Sign Co-ordinator's Sign Principal's Sign