



NAME: \_\_\_\_\_  
CLASS: \_\_\_\_\_ DIV : \_\_\_\_\_  
Prepared By: ASHWINI S.

DATE: \_\_\_\_\_  
SUBJECT: MATHS  
L- 8- Measurements


**Q1. Choose the correct answer:**

- a) A book is \_\_\_\_\_ than paper. ( heavier/ lighter)
- b) A cup holds \_\_\_\_\_ tea than a tea pot. ( more / less)
- c) A cherry is \_\_\_\_\_ than an apple. ( heavier/ lighter)
- d) Footspan shows \_\_\_\_\_ distance than cubit. ( long / short)
- e) Elephant is \_\_\_\_\_ than mouse. ( bigger / smaller)

**Q2. State True or False:**

- a) A pumpkin is heavier than a banana. \_\_\_\_\_
- b) A mouse is bigger than tiger. \_\_\_\_\_
- c) Jug has more capacity to hold water than a spoon. \_\_\_\_\_
- d) 8 tea cups are greater than 8 water bottles. \_\_\_\_\_


**Q3. Write 'L' for light object and 'H' for heavy ones.**




**Q4. Circle the object which holds more capacity in each set.**



b)



**Q5. Look at the picture and compare : (taller / Shorter)**





- a) Giraffe is \_\_\_\_\_ than Zebra.  
b) Rabbit is \_\_\_\_\_ than wolf.  
c) Zebra is \_\_\_\_\_ than wolf but \_\_\_\_\_ than Giraffe.

**Q6. Fill in the blanks: ( handspan, cubit, down, foot span, less than)**

- a) The distance from tip of the thumb to the tip of finger is \_\_\_\_\_.  
b) A pitch for cricket can be measured in \_\_\_\_\_.  
c) Distance from the tip of the middle finger to the elbow is \_\_\_\_\_.  
d) A handspan is \_\_\_\_\_ cubit.  
e) The balance goes \_\_\_\_\_ if the object is heavy.

**Q7. Circle the shorter object:**

a)



b)

