




NAME: \_\_\_\_\_  
CLASS: \_\_\_\_\_ DIV : \_\_\_\_\_  
Prepared By: ASHWINI S.

DATE: \_\_\_\_\_  
SUBJECT: MATHS  
L- 9- Money

**Q1. Look at the notes and write their value in the box with the rupee symbol ₹:**



**Q2. Add the notes and coins and match:**



**Q3. Write the number of coins or notes that will be needed to make given amount:**



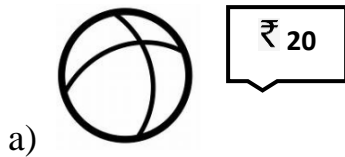
a) ₹ 5 =  coin of ₹ 1

b) ₹ 50 =  note of ₹ 10

b) ₹ 20 =  coin of ₹ 5

d) ₹ 10 =  coin of ₹ 2

**Q4. Match the money require to buy following items:**



**Q5. Fill in the boxes:**

a) You can exchange  coins of ₹ 2 for ₹ 10

b) You can exchange  notes of ₹ 50 for ₹ 100.

**Q6. Write T for True and F for False:**

a) Rohan can buy lollipop of ₹ 5 with 3 coins of ₹ 1.

b) Indian currency is denoted by the symbol ₹

c) Ram has 2 notes of ₹20 that means he have ₹ 100

d) There is ₹ 60 note in Indian currency.