



Name - _____

Div - _____

Prepared by: Sonal Dixit

SUBJECT : Maths

L .No. 8 Topic : Measurements

Q1.Fill in the blanks.

- _____ and _____ is the standard unit for measuring the length.
- Metre is used to measure the lengths of _____ objects.
- Centimetre is used to measure the lengths of _____ objects.
- _____ and _____ is the standard unit for measuring the mass or weight.
- _____ is used to measure the mass of heavy objects.
- _____ is used to measure the mass of lighter objects.
- _____ and _____ is the standard unit for measuring the capacity.
- _____ is used to measure more capacity.
- Millilitre is used to measure _____ capacity.

Q2. Use the $>$, $<$, $=$ symbols to compare the mass.

- 500g _____ 900g
- 14kg _____ 7 kg
- 3kg _____ 3000g
- 800g _____ 2kg

Q 3. Write the short form of :-

- | | | | |
|---------------|---------|----------------|---------|
| a. Kilogram | - _____ | b. Gram | - _____ |
| c. Litres | - _____ | d. Millilitres | - _____ |
| e. Centimetre | - _____ | f. Metre | - _____ |

Q4. Match the following



Column A

ColumnB



- | | |
|----------|--------|
| a. 1L | 100cm |
| b. 1000g | 1000ml |
| c. 1m | 1kg |

Q5. Use signs (<, >, =) to compare capacity

1.



2.



Q6. Arrange the following in Ascending Order.


1. 40cm, 7cm, 14cm

2. 2l, 21l, 33l


3. 20 kg, 6 kg, 25 kg

Q7. Read the following information and answer the following question

Length of Ayush's pencil is 7 cm



Length of Rahul's pencil is 11 cm



1. Whose pencil is longer?

2. How much longer?

Q8. Write whether statement True or False.

1. A spoon is lighter than a pan.

2. A bottle is heavier than water tank.

Subject Tr's. Sign

HOD's Sign

Co-ordinator's Sign

Principal's Sign