



Name - _____

Div - _____

Prepared by: Sonal Dixit

SUBJECT : Maths

L.No. 9 Topic : Multiplication

A. Write fill in the blanks

- _____ is a repeated addition.
- Two numbers are multiplied to give a _____.
- 6 groups of 2 = _____

B. T for true and F for False.







- 3 times 9 is same as 3 group of 9. _____
- 3×5 is same as 3 times 3. _____
- In $6 \times 5 = 30$, 30 is product. _____

C. Write the multiplication statements for the repeated addition.

a. $5 + 5 + 5 =$ _____ $=$ _____

b. $8 + 8 + 8 + 8 + 8 =$ _____ $=$ _____

c.  +  +  = _____ = _____

d.  +  + 
 +  +  = _____ = _____

D. Write the terms used in multiplication. $6 \times 3 = 18$

6 = _____ 3 = _____ 18 = _____

E. Complete the following.

a. $4 \times 5 =$ _____ $\times 4$

c. $3 \times 9 =$ _____ $\times 3$

e. $2 \times 7 = 7 \times$ _____

b. $3 \times 7 =$ _____

d. $4 \times 6 = 6 \times 4 =$ _____

f. $5 \times 10 = 10 \times 5 =$ _____

D. Find the product.

	H	T	O
	3	1	4
×			2

	H	T	O
	1	2	3
×			3

	H	T	O
	4	1	2
×			2

	T	O
	8	8
×		4

	T	O
	1	2
×		5

E. Word problems.

1. Ronit sells 144 cupcakes in a one day.

How many cup cakes does he sell in 4 days?

Given - _____

Ans - _____

	H	T	O

F. Multiplication tables.

$2 \times 1 = 2$	$4 \times 1 = 4$	$6 \times 1 = 6$	$7 \times 1 = 7$	$8 \times 1 = 8$