



Pre –Activity

Count and write the number of smiley and sad emotions.







Smiley 6 sad 4

12 A. Fill in the blanks.


1. Data handling means collecting the set of data and presenting in a different form.

12B. Count the different shapes and write total number of each shape in the table.



Shape	Total number
	5
	1
	23
	9

12C. Pictograph and tally marks.



Fruits	Apple	Banana	Grapes	Orange
Quantity	6	4	3	5

Fruits Tally marks

Apple

Banana

Grapes

Orange

12D. Students favorite item



shutterstock.com - 1470761246



1 hand = 5 studentts

Q.1 How many students like icecream?

Ans: 15

Q.2 How many students like strawberry?

Ans: 10

3D. Post – Activity

Item	Quantity
1. Sharpner	20
2. Eraser	15
3. computer	5
4. candle	25
5. Flower vase	2

Fill in the blanks.

- a. How many items are there in all? 5
- b. How many sharpners are there 20
- c. Flower vase are least in number.

