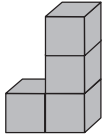


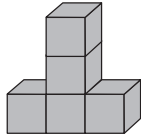
ADDITIONAL WORKSHEET 1

1. Find the volume of the solid shapes given below. Each  = 1 cm³.

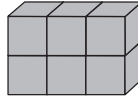
a.



b.

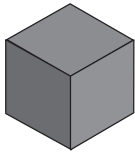


c.

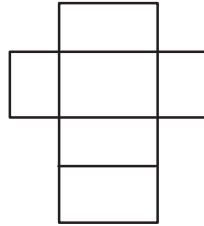


2. Match the solid shapes to their nets.

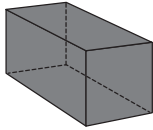
a.



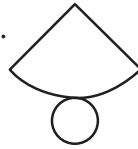
i.



b.



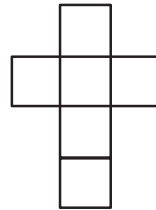
ii.



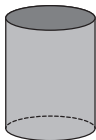
c.



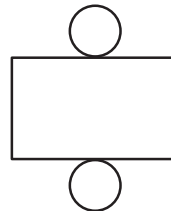
iii.



d.



iv.



3. What will be the top view of the figure given here?

