

CLASS - III
SUB - MATHS

TERM - 1

MARKS - 20 MARKS

CLASS TEST - 6

L-6 Factors and
Multiplication

Q1. Choose the correct answer. [4]

a) $10 \times \underline{\quad} = 90$

(i) 8

(ii) 19

(iii) 90

(iv) 9

b) $2 \times 6 = 6 \times \underline{\quad}$

(i) 0

(ii) 2

(iii) 6

(iv) 12

c) $25 \times 0 = \underline{\quad}$


(i) 25

(ii) 5

(iii) 0

(iv) 50

d) What multiplication sentence is shown by array?



(i) $3 \times 4 = 12$

(ii) $4 \times 4 = 16$

(iii) $3 \times 10 = 30$

(iv) $2 \times 4 = 8$

Q2. Fill in the blanks [5]

a) Multiplication is a repeated _____.

b) The number to be multiplied is called _____.

c) The product of 0 and any number is _____.

d) $24 \times 1 = \underline{\quad}$

e) _____ \times multiplier = product.

Q3 Match the following. [5]

- | | |
|-----------------|------|
| 2×7 | 110 |
| 4×3 | 14 |
| 3×6 | 1300 |
| 11×10 | 18 |
| 13×100 | 12 |


Q4 Solve the following. [6]

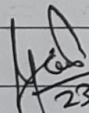
a) Find the products using column method.

- (i) 15×2 (ii) 69×7

b) Amin fried 15 potatoes. To fry each potato he took 8 minutes, how long did it take to fry 15 potatoes?

Priyanka
SUBJECT
TEACHER


23/7/24
HOD


23/7/24
COORDINATOR

PRINCIPAL